

Chapter 13-Quiz

Name:

Score:

1. What is the study of population called?

- A. cartography
- B. demography
- C. paleontology
- D. geomorphology

2. Which profession would compile this information?

- A. geologist
- B. cartographer
- C. demographer
- D. meteorologist



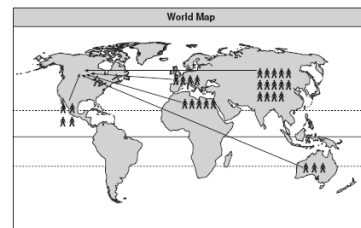
3. a) What is happening to the world's population? _____

b) What is the difference between developing and industrialized countries, as far as population growth is concerned?

4. What is the difference between emigration and immigration?

5. From Canada's perspective, which term describes the movement illustrated by this map?

- A. emigration
- B. immigration
- C. net migration
- D. population density



6. What are **two** differences between a developed and a developing nation?

7. What is a census?

8. How often do we have a **major** census in Canada? _____

9. Which of the following factors is typical at **Stage 3** of the Demographic Transition Model?

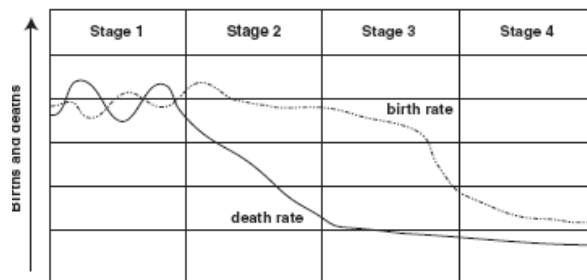
- A. falling immigration
- B. lowering literacy rates
- C. rising standard of living
- D. increasing HIV/AIDS infections

10. Which of the following factors is typical at **Stage 2** of the Demographic Transition Model?

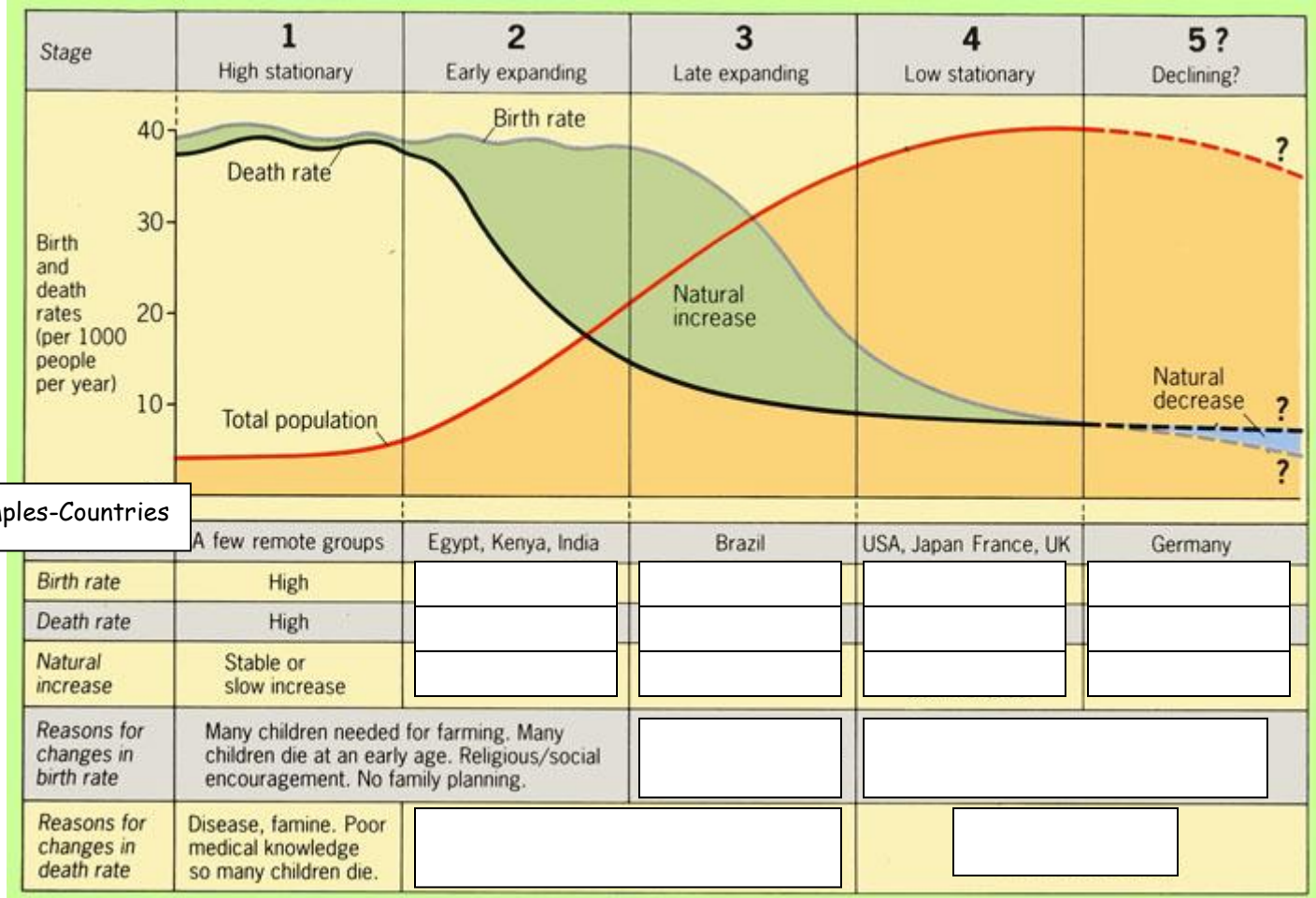
- A. low fertility rates
- B. reduced immigration
- C. medical improvements
- D. a highly industrialized economy

11.a) How is the dependency ratio calculated for a nation?

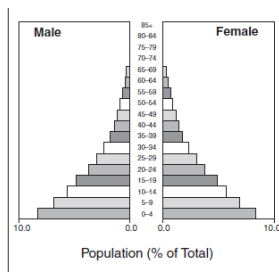
b) Why is it important to calculate the dependency ratio of a nation?



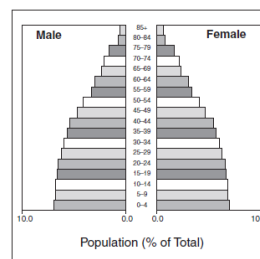
Fill out the Demographic Transition on pg.2 ---->b



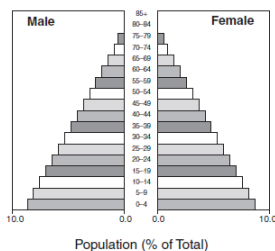
12a. What type of pyramid is shown below _____



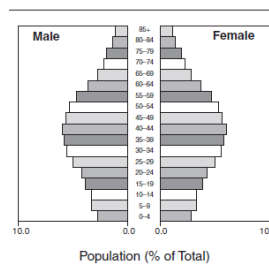
12c. What type of pyramid is shown below _____



12b. What type of pyramid is shown below _____

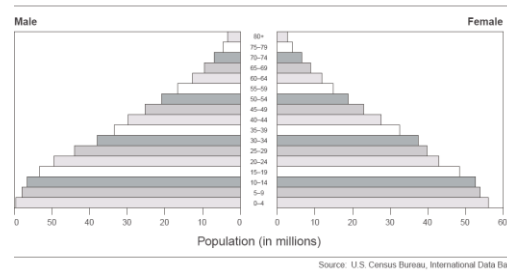


12d. What type of pyramid is shown below _____



13. In what stage of demographic growth is this population pyramid?

- A. early expanding
- B. expanding
- C. stable growth
- D. contracting



The average Nigerian woman will have 5.4 children in her lifetime

14. What is being described by this statistic?

- A. birth rate
- B. fertility rate
- C. life expectancy
- D. dependency ratio

78 babies out of 1000 die before their first birthday

15. What does this statement describe?

- a. fertility rate
- b. crude birth rate
- c. life expectancy rate
- d. infant mortality rate

16. The crude birth rate of a country is determined by calculating the

- a. crude death rate first.
- b. number of births during a year per 1,000 people.
- c. number of births during a year per 100 people.
- d. number of births subtracted from the number of deaths.

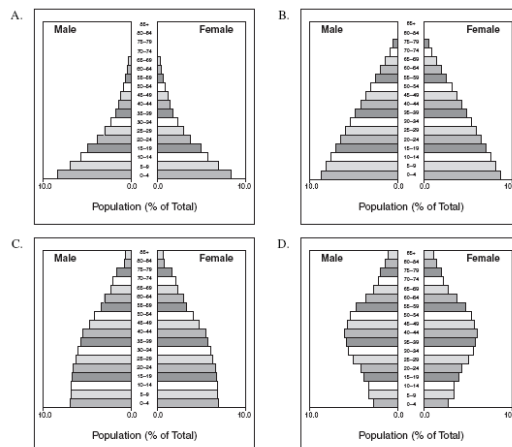
17. Which policy did China enact in order to control its population growth?

- A. "one-child policy"
- B. "official birth control act"
- C. "abstinence campaign"
- D. "education campaign"

18. Which statement **best** reflects a country with a high dependency ratio?

- A. low birth rates
- B. low life expectancy
- C. higher numbers of workers to contribute taxes
- D. higher costs of caring for the young and elderly

19. Which population pyramid shows the greatest decline in population growth rate?



20. Why is Canada's dependency ratio increasing?

- a. high fertility rate
- b. ageing population
- c. increased immigration
- d. decreased life expectancy

| Country | Persons per square km |
|--------------|-----------------------|
| Canada | 3.2 |
| Sierra Leone | 78.6 |
| Vietnam | 246 |

21. What do these statistics represent?

- A. natural growth
- B. natural increase
- C. population density
- D. population distribution

22. What is a determining factor in population distribution?

- A. literacy rate
- B. fertility rate
- C. doubling time
- D. physical geography

23. All of the following are shown on a population pyramid **except**

- A. life expectancy
- B. total population
- C. population numbers by gender
- D. population numbers by age group